

Name: \_\_\_\_\_

**GCSE 9-1 Higher  
Practice Paper  
Set A  
Paper 2 - Calculator**



**Equipment**

1. A black ink ball-point pen.
2. A pencil.
3. An eraser.
4. A ruler.
5. A pair of compasses.
6. A protractor.
7. A calculator

**Guidance**

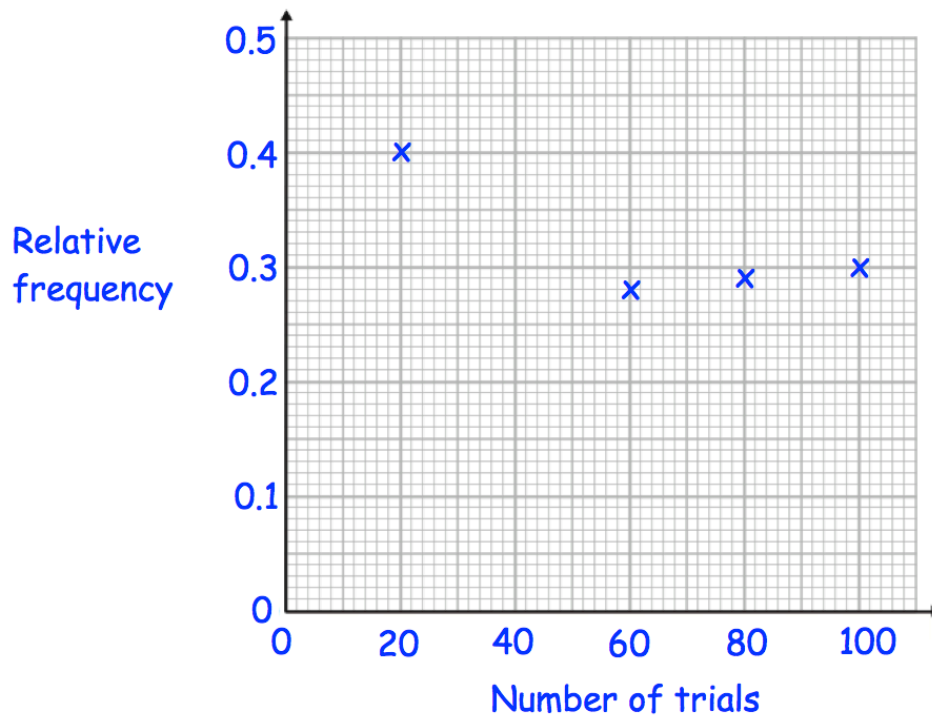
1. Read each question carefully.
2. Don't spend too long on one question.
3. Attempt every question.
4. Check your answers seem right.
5. Always show your workings

**Information**

1. Time: 1 hour 30 minutes
2. The maximum mark for this paper is 80.
3. You may use tracing paper.

Question	Mark	Available
1		5
2		4
3		2
4		6
5		4
6		3
7		2
8		2
9		2
10		3
11		4
12		3
13		3
14		2
15		4
16		3
17		5
18		3
19		3
20		5
21		5
22		3
23		4
Total		80

1. There are 50 sweets in a jar.  
In a trial, a sweet is chosen at random and then it is replaced.  
The results are recorded after every 20 trials.  
The graph shows the relative frequency of a blue sweet



In the first forty trials, ten blue sweets were chosen.

- (a) Plot this result on the graph.

(1)

- (b) What is the best estimate, from the graph, of the probability of choosing a blue sweet?  
Explain your answer.

.....

.....

.....

(2)

- (c) Use your answer to estimate the number of blue sweets in the jar.

.....

(2)

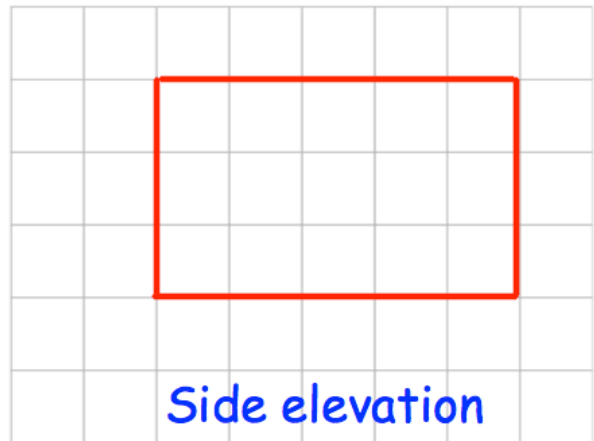
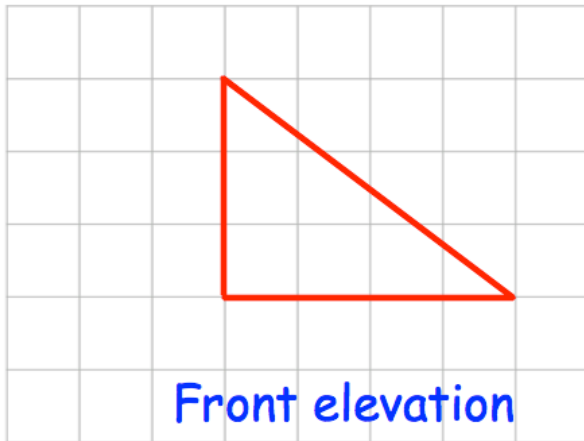
2. At Donhampton High School the ratio of boys to girls is 7:5  
Each student studies one language, Spanish or German.

$\frac{3}{5}$  of the girls studied Spanish.  
168 girls studied German.  
75% of the boys study Spanish.


How many boys study Spanish?

.....  
(4)

3. Here are the front and side elevations of a solid shape.



- (a) On the grid, draw the plan view.



(2)

4. Lee complete a journey in three stages.

In stage 1 of his journey, he drives at an average speed of 30km/h for 45 minutes.

(a) How far does Lee travel in stage 1 of his journey?

.....km  
(2)

In stage 2 of his journey, Lee drives at an average speed of 50km/h for 2 hours 48 minutes.

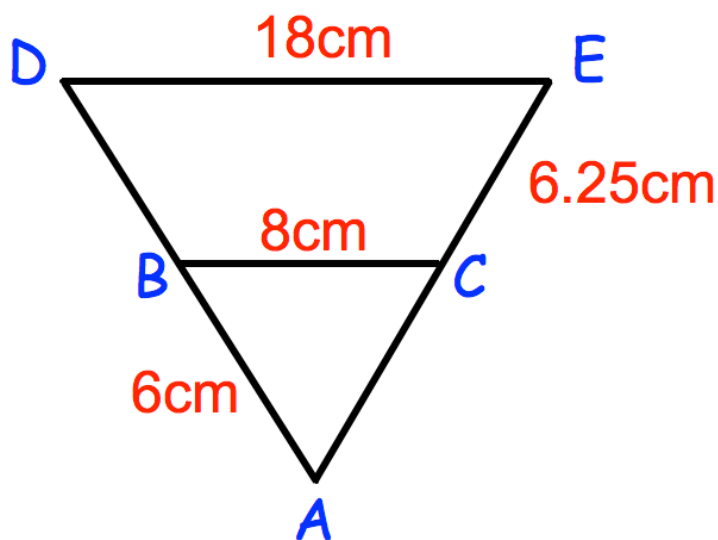
Altogether, over all three stages, Lee drives 200 km in 4 hours.

What is his average speed, in km/h, in stage 3 of his journey?

.....km/h  
(4)

5.

Not drawn accurately



Triangle  $ABC$  is similar to triangle  $ADE$ .

$AB = 6\text{cm}$   
 $BC = 8\text{cm}$   
 $CE = 6.25\text{cm}$   
 $DE = 18\text{cm}$

(a) Work out the length of  $DB$ .

.....cm  
(2)

(b) Work out the length of  $AC$ .

.....cm  
(2)

6. Martyn has some money to invest and sees this advert.

## Bank of Maths

Double your money in 15 years.

The average annual growth for your investment is 4.5%

Will Martyn double his money in 15 years by investing his money with “Bank of Maths?”

You **must** show your workings.

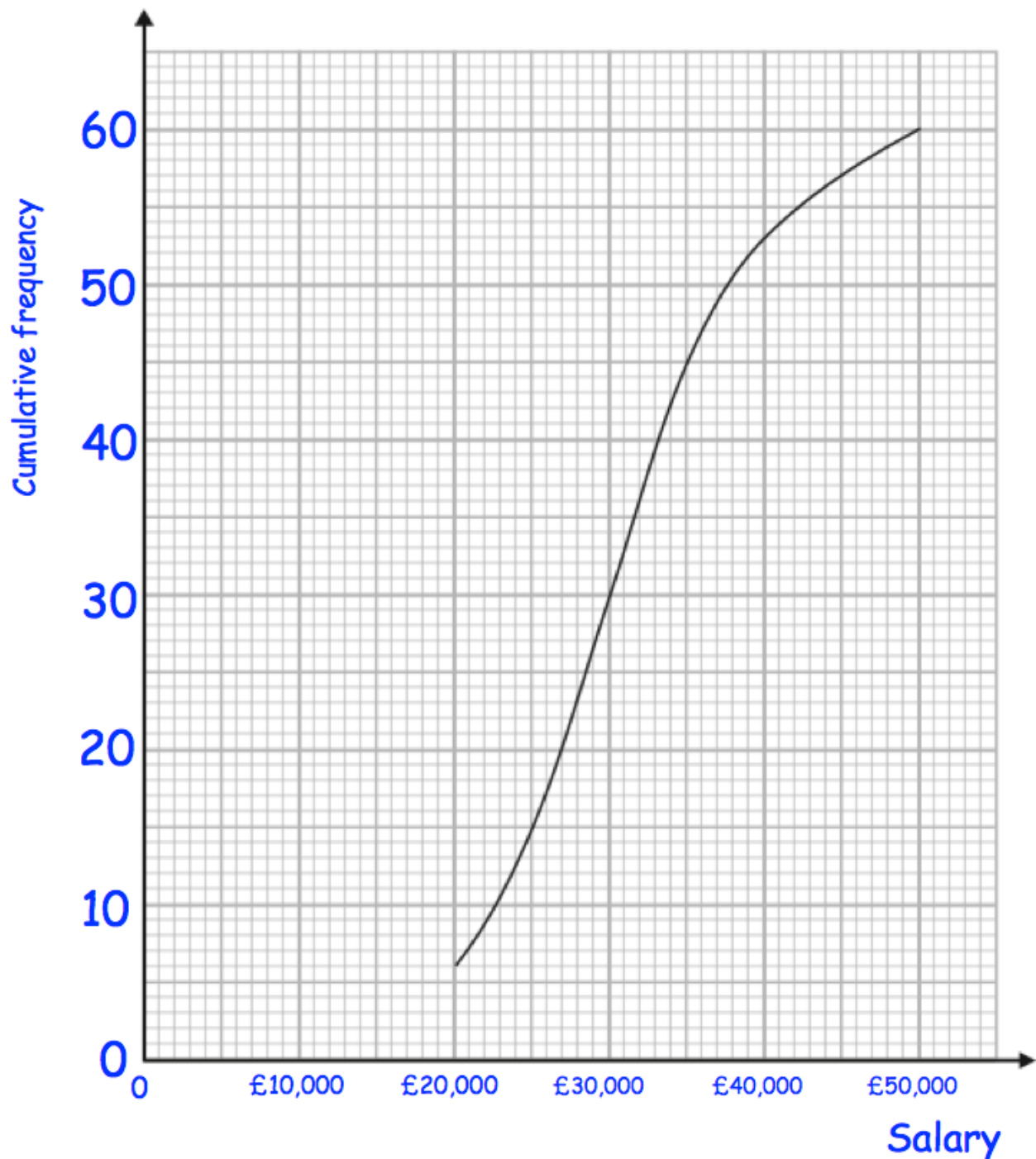
(3)

- 
7. A number,  $y$ , is rounded to 1 decimal place.  
The result is 8.1

Using inequalities, write down the error interval for  $y$

.....  
(2)

8. A university surveyed 60 mathematics graduates on their starting salary. The cumulative frequency graph shows some information about the salaries.

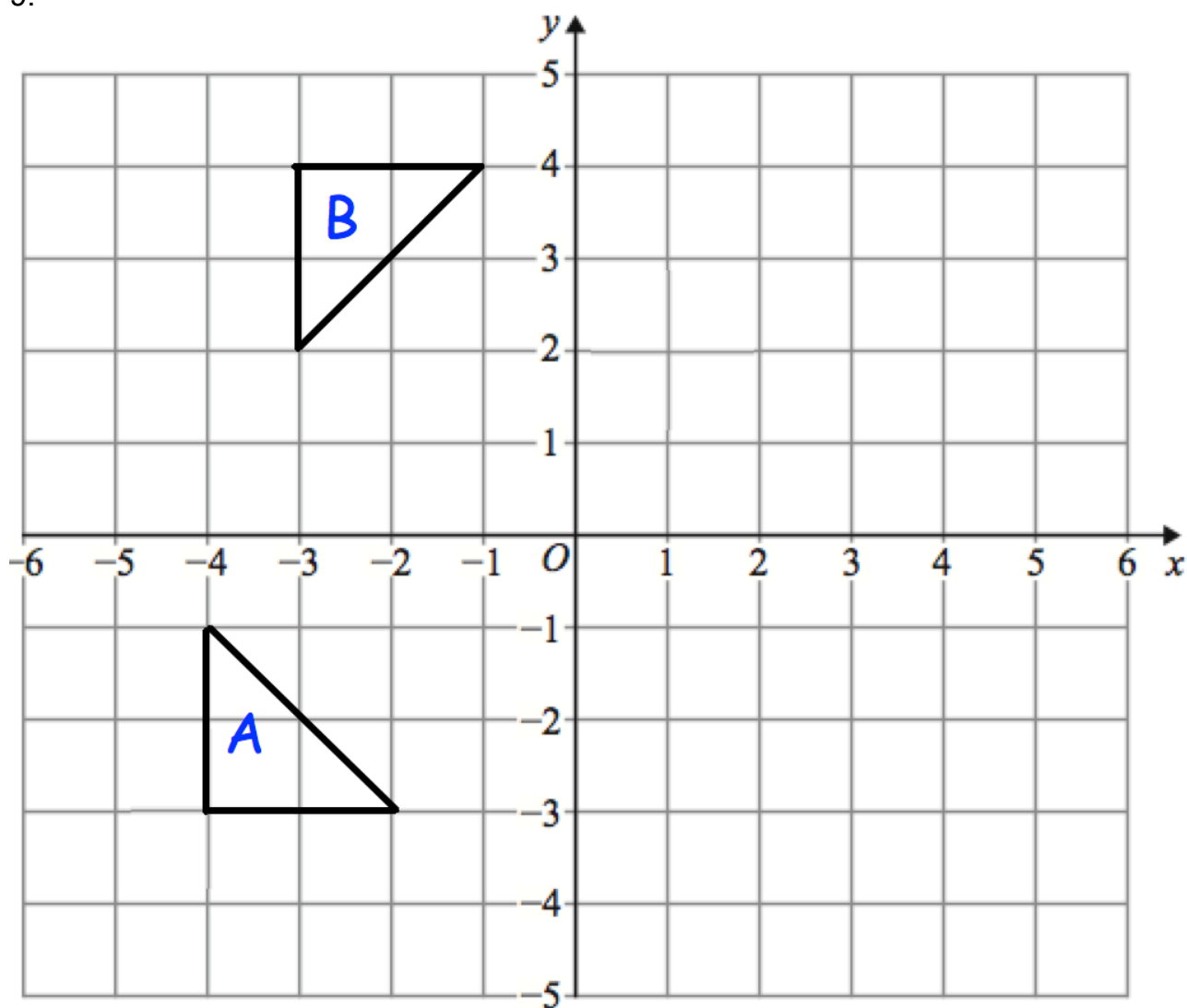


Use the graph to find an estimate for the interquartile range.

£.....  
(2)



9.



Describe fully the single transformation that maps triangle A onto triangle B.

.....

.....

(2)

10.  $M = 4ac^2$

$a = 9.2 \times 10^{-6}$       and       $c = 7.8 \times 10^4$

- (a) Work out the value of M  
Give your answer in standard form correct to 2 significant figures.

M = .....  
(2)

a is doubled  
c is doubled

Jordan says,

“The value of M will be four times larger because both a and c are doubled.”

- (b) Explain why Jordan is wrong.

.....  
.....  
(1)

11. Solve

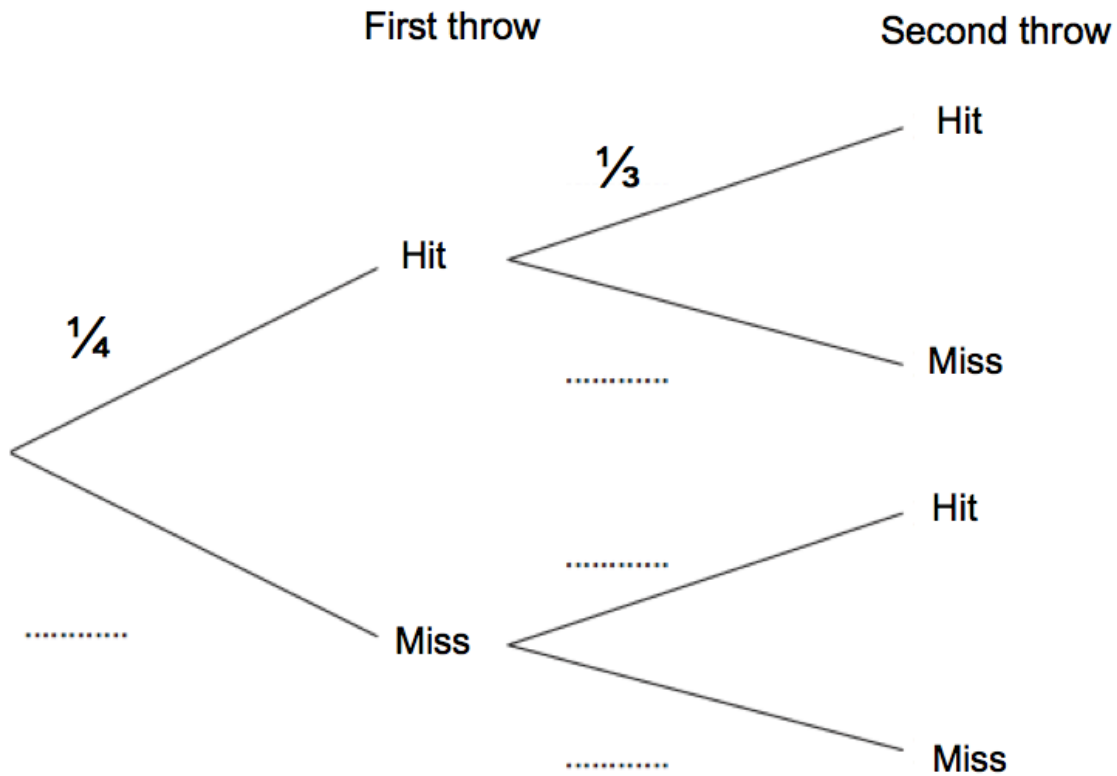
$$\frac{10x - 3}{3} + \frac{5x + 2}{4} = 5$$

You must show your working.

x = .....  
(4)

The probability Jennifer hits the Bullseye on her first throw is  $\frac{1}{4}$ .  
The probability she hits the Bullseye on her second throw  $\frac{1}{3}$ .

(a) Complete the tree diagram.

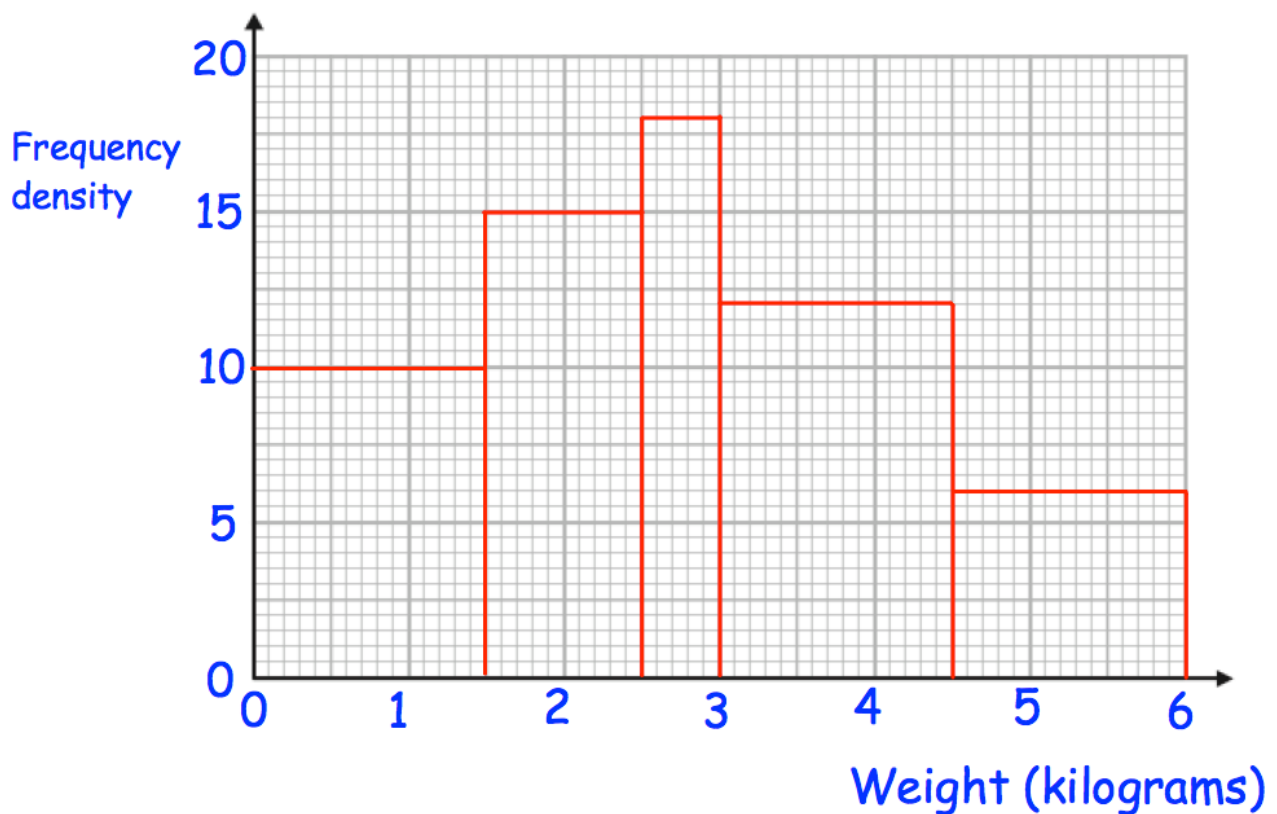


**(1)**

(b) Work out the probability Jennifer hits the Bullseye at least once.

**(2)**

13. Below is a histogram showing information about the weight of 66 parcels.



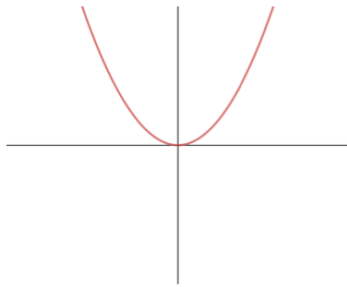
$\frac{1}{3}$  of the parcels which weighed between 2.5kg and 4kg were sent to Scotland

Work out an estimate for the number of parcels sent to Scotland.

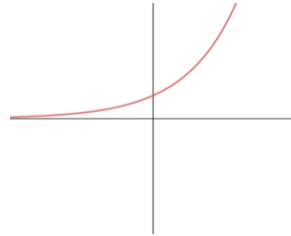
.....  
(3)

14. Match each graph to the correct equation

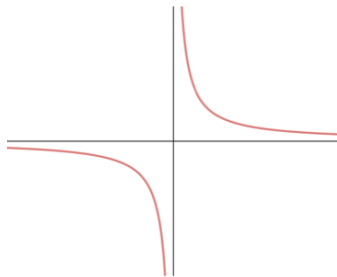
Graph A



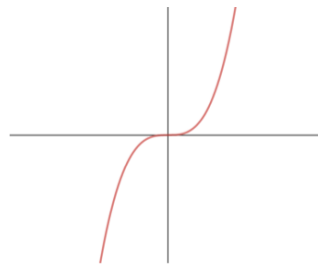
Graph B



Graph C



Graph D



$y = x^2$  is graph **A**

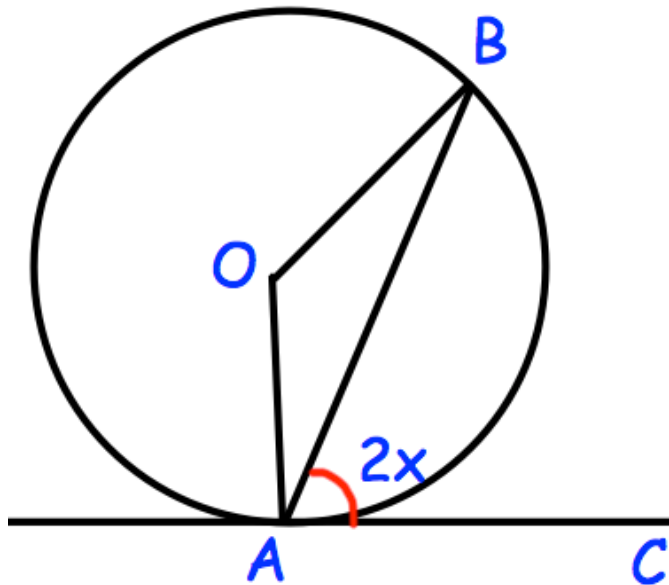
$y = x^3$  is graph .....

$y = 2^x$  is graph .....

$y = \frac{1}{x}$  is graph .....

(2)

15.



A and B are points on the circumference of a circle, centre O.  
CA is a tangent to the circle.  
Angle  $CAB = 2x$

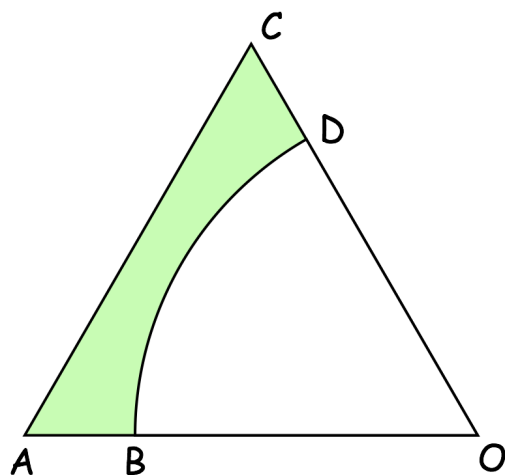
Prove that angle  $AOB = 4x$   
Give reasons for each stage of your working.

(4)

16. Show, using algebra, that  $1.0\dot{2}\dot{4} = 1\frac{4}{165}$

**(3)**

17.



$AOC$  is an equilateral triangle of side length 14cm.

$OBD$  is a sector of a circle with centre  $O$  and radius 11cm.

Calculate the area of the shaded region as a percentage of the area of triangle  $AOC$ .

Give your answer correct to 3 significant figures.

.....%

(5)



18.

$$\frac{81^y}{3^{y-5}} = 3\sqrt{3}$$

Work out the exact value of y

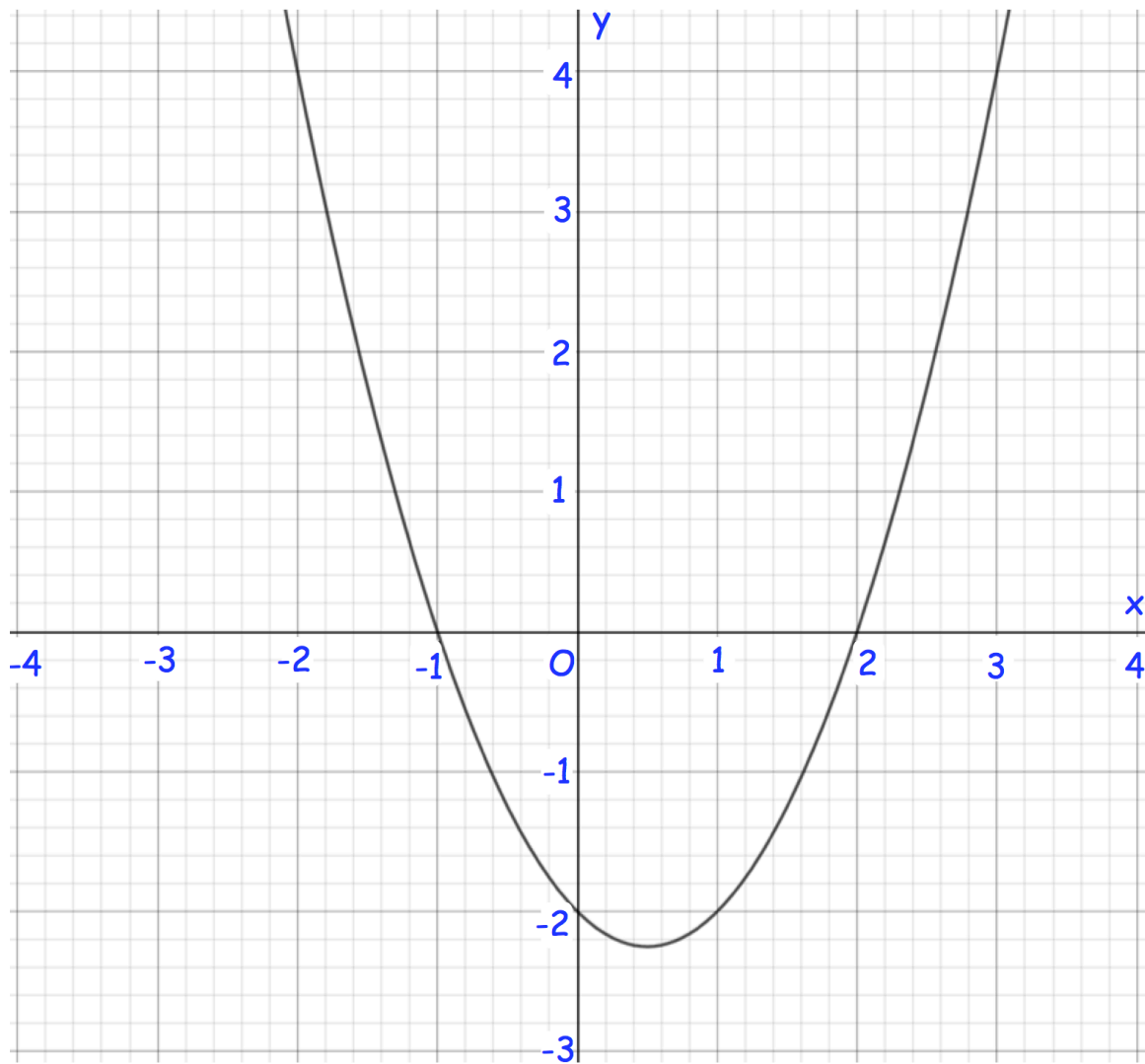
.....  
(3)

19. Simplify fully

$$\frac{x^3 - x}{x + 2} \div \frac{x^2 - x}{x^2 - 5x - 14}$$

.....  
(3)

20. The diagram shows part of the graph of  $y = x^2 - x - 2$



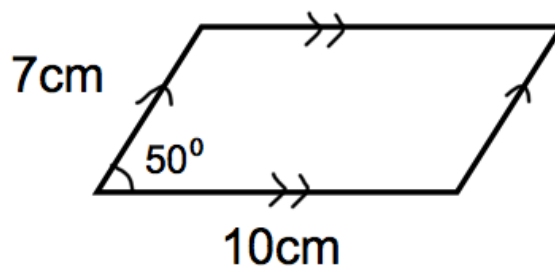
- (a) By drawing an appropriate straight line, use your graph to find estimates for the solutions of  $x^2 - 2x - 1 = 0$

.....  
(2)

- (b) Calculate an estimate for the gradient of the graph  $y = x^2 - x - 2$  at the point where  $x = 1$

.....  
(3)

21. Shown below is a parallelogram.



Calculate the area of the parallelogram.

.....cm<sup>2</sup>  
(5)

---

22. Here are the first five terms of a quadratic sequence.

3      12      25      42      63

Find an expression, in terms of  $n$ , for the  $n$ th term of this sequence.

.....  
(3)

23. A circle has an equation of  $x^2 + y^2 = 5$

$Q\left(\frac{4}{3}, \frac{\sqrt{29}}{3}\right)$  is a point on the circle.

Find the equation of the tangent to the circle at the point Q.

.....  
**(4)**